
Name: _____

Instruction: Draw a line to match the numerals to the number names.

11

fifteen

13

twelve

15

eleven

14

thirteen

12

fourteen


Instruction: Draw objects to match each numeral.

11	
12	
13	
14	
15	



Name: _____

Instruction: Follow the correct number sequence to help the police officer find his car.




A grid puzzle with a police officer and a car. The grid contains numbers in a sequence that needs to be followed from the start sign to the finish sign.

				6	8	9	10
				2	7	12	11
1	8	5	6	13	14		
2	3	4	9	17	15		
9	7	14	10				
0	8	5	11				

The grid is a 6x8 grid. The top two rows are partially filled with numbers. The bottom two rows are partially filled with numbers. The middle two rows are completely filled with numbers. The numbers are: Row 1: (1,4)=6, (1,5)=8, (1,6)=9, (1,7)=10; Row 2: (2,4)=2, (2,5)=7, (2,6)=12, (2,7)=11; Row 3: (3,1)=1, (3,2)=8, (3,3)=5, (3,4)=6, (3,5)=13, (3,6)=14; Row 4: (4,1)=2, (4,2)=3, (4,3)=4, (4,4)=9, (4,5)=17, (4,6)=15; Row 5: (5,1)=9, (5,2)=7, (5,3)=14, (5,4)=10; Row 6: (6,1)=0, (6,2)=8, (6,3)=5, (6,4)=11. A police officer stands next to a 'START' sign on the left. A car is next to a 'FINISH' sign on the right.

Name: _____

Instructions: Colour the triangles purple, the circles green, the squares yellow, the ovals red, the rectangles orange and the diamonds blue.






Name: _____

Instruction: Put an X on the coins and circle the notes.




Name: _____

Instructions: Help to take the van back to the police station. Colour the van that will get there first **red**, put an **X** on the **2nd** van and **circle** the **3rd** police station.



POLICE STATION

Instructions: Count the set of hearts. Draw and colour hearts to make the set equal.

	
---	--



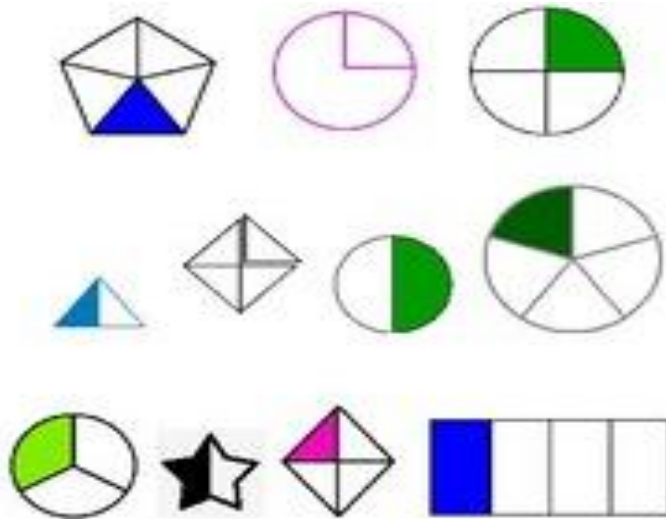
Name: _____

Instructions: Draw to show a ball in the box and a cat out of the box. Trace the words in and out under the correct picture.

in

out

Instruction: Circle the shapes that show a quarter.



Year 1 Week 13 Day 5

